

Name: \_\_\_\_\_ Date: \_\_\_\_\_ Period: \_\_\_\_\_

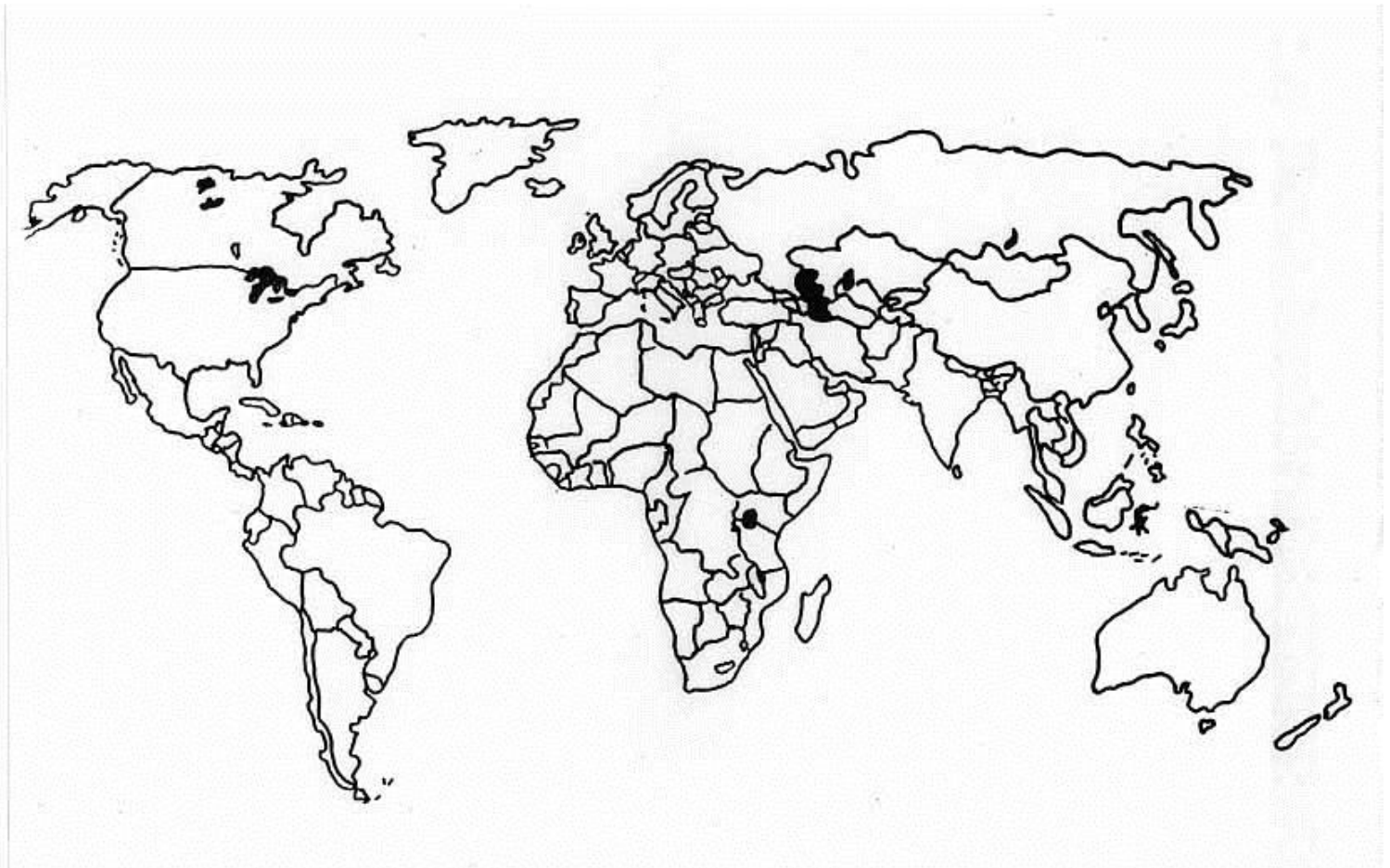
## Where in the World is Georgia Located?

**Directions:** define the following terms using what you've learned previously or your own electronic device. Then note Georgia's location according to the term.

Term	Definition	Georgia's location in relation to...
Hemisphere		(hint: Georgia's in two)
Equator		
Prime Meridian		
Continent		
Nation		

**Directions:** Complete the following steps.

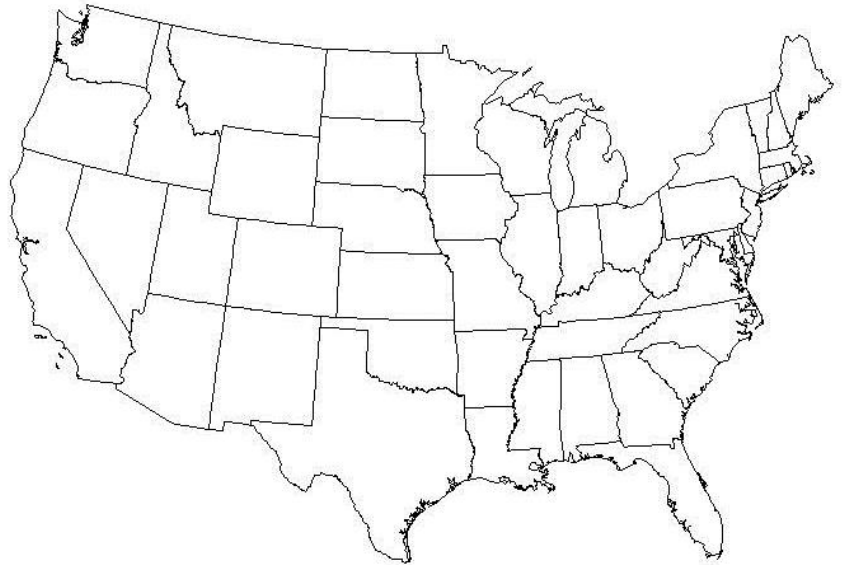
- Draw a line that represents the Prime Meridian.
- Draw another line that represents the Equator.
- Shade in where you would find Georgia on the map.
- Identify each hemisphere (hint: there are four)



# Where in the United States is Georgia located?

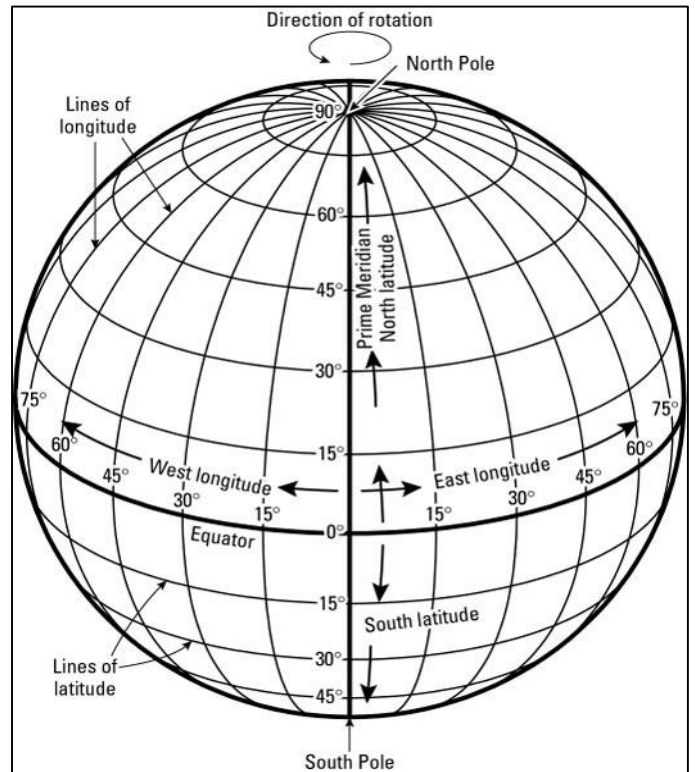
**Directions:** complete the following steps.

- Define Region:
- Georgia is located in the southeast region of the United States. Shade the southeastern states.



**Directions:** below you will see two definitions. Determine which definition belongs with each image by writing the term underneath.

- **Relative Location:** Describes where a place is located compared with other places.
- **Absolute Location:** Identifies a precise position on Earth's surface, such as latitude and longitude coordinates.



---

---